

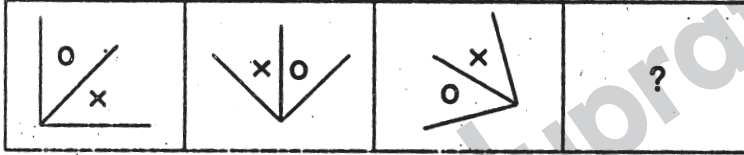
# Railway Recruitment Board, Bangalore

Ticket Collector/ Commercial Clerk Examination

Held on : 04 - 20 - 2007

Directions (Q. 1 to 4): Which figure from answer figures will come in place of the question mark (?) in the following questions?

## 1. Question figures



## Answer figures



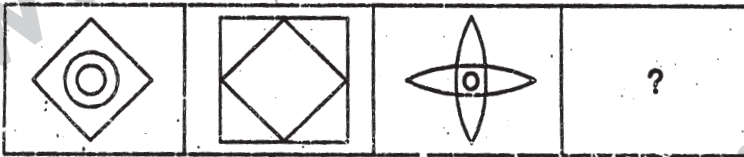
(a)

(b)

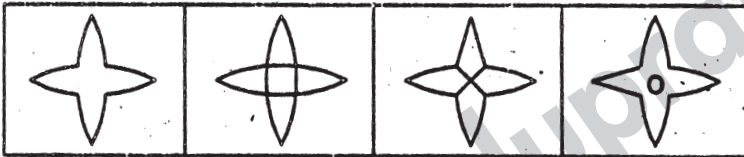
(c)

(d)

## 2. Question figures



## Answer figures



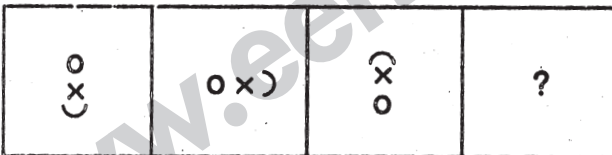
(a)

(b)

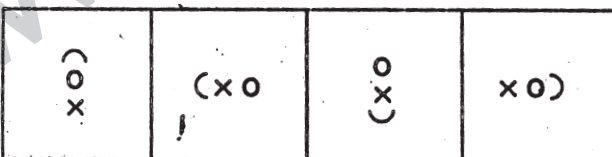
(c)

(d)

## 3. Question figures



## Answer figures



(a)

(b)

(c)

(d)



12. c\_baa\_aca\_cacab\_acac\_bca

a) acbaa

b) bbcaa

c) bccab

d) cbaac

*Directions (Q. 13 and 14): What will come in place of the question mark (?) in the following questions?*

13. Melt : Liquid :: Freeze : ?

a) Ice

b) Condense

c) Solid

d) Force

14. Eye : Myopia :: Teeth : ?

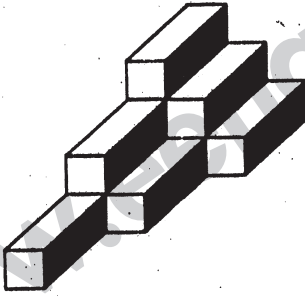
a) Pyorrhoea

b) Cataract

c) Trachoma

d) Eczema

15. Find the number of cubes in the following figure?



a) 8

b) 10

c) 12

d) 14

*Directions (Q. 16 to 20): What will come in place of the question mark (?) in the following questions?*

16. 144, 121, 100, 81, ?

a) 75

b) 65

c) 70

d) 64

17. AE, FJ, KO, ?

a) PT

b) PU

c) PV

d) PF

18. 4, -8, 16, -32, 64, ?

a) -192

b) 192

c) -128

d) 128

19. QDXM : SFYN :: UIOZ : ?

a) PAQM

b) LPWA

c) QNLA

d) WKPA

20. Rocket : Fuel :: ?

a) Man : Energy

b) Machine : Oil

c) Current : Electricity

d) River : Water

21. Choose the best alternative for the answer.

A newspaper certainly has

a) advertisement

b) paper

c) date

d) news



32. A trader buys some goods for Rs.150. If the overhead expenses be 12% of cost price, then at what price it be sold to earn 10%?
- a) Rs.185.80                      b) Rs.184.80                      c) Rs.187.80                      d) Rs.188.80
33. The area of a circle is  $1386 \text{ m}^2$ . Find its circumference.
- a) 444 m                              b) 70 m                              c) 132 m                              d) 19 m
34. A sold a watch to B at the gain of 20% and B sold it to C at a loss of 10%. If C bought the watch for Rs.216, at what price had A bought the watch?
- a) Rs.216                              b) Rs.100                              c) Rs.250                              d) Rs.200
35. A two - digit number is five times the sum of its digits. If 9 is added to the number, the digits inter - change. Find the sum of the digits.
- a) 11                                      b) 7                                      c) 6                                      d) 9
36. If 12 men or 18 women can do a work in 14 days, then in how many days will 8 men and 16 women do the same work?
- a) 12 days                              b) 10 days                              c) 14 days                              d) 9 days
37.  $\sqrt{0.0081} = ?$
- a) 0.09                                      b) 0.9                                      c) 0.91                                      d) 0.009
38.  $\frac{25.025}{0.025}$  is equal to-
- a) 1.01                                      b) 1001                                      c) 10.1                                      d) 101
39. What will be the next number in the series  
766, 656, 546, ...?
- a) 446                                      b) 436                                      c) 456                                      d) 426
40. The selling price of tables is equal to the cost price of 9 tables. The profit per cent is-
- a) 12%                                      b) 10%                                      c) 12.5%                                      d) 15%

**Directions (Q. 41 to 45): Find the word which is of the same meaning (synonyms) to the given word.**

**41. Lenient**

- a) Harsh                                      b) Strict                                      c) Mild                                      d) Unforgiving

**42. Ignore**

- a) Respect                                      b) Reject                                      c) Regard                                      d) Consider



55. he not only (P)/ made others do so (Q)/ but also helped (R)/ the needy himself (S).

- a) SPQR                      b) PSRQ                      c) QPRS                      d) PQRS

*Directions (Q. 56 to 60): Fill up the blanks with the most suitable word.*

56. Gandhiji had ..... unique weapon to protest called the satyagraha.

- a) an                              b) many                      c) a                              d) most

57. I cannot ..... meaning of the sentence.

- a) make                              b) make up                      c) make for                      d) make out

58. He was complaining ..... severe chest pain.

- a) against                              b) with                              c) of                              d) form

59. The proud king turned a deaf ear to the ..... of his ministers.

- a) advises                              b) advice                              c) advisor                              d) advices

60. I had a glass of lemon juice to ..... my thirst.

- a) stop                              b) prevent                              c) quench                              d) finish

61. Who composed Ain - e - Akbari?

- a) Farista                              b) Ibn Battuta                              c) Abul Fazal                              d) Birbal

62. Who introduced the "Doctrine of Lapse"?

- a) Dalhousie                              b) Canning                              c) Rippon                              d) Lytton

63. Who permitted the English to establish first factory in India?

- a) Akbar                              b) Jahangir                              c) Shahjahan                              d) Aurangzeb

64. The word Buddha means-

- a) A winner                              b) A preacher                              c) An enlightened                              d) A traveller

65. Who determined the boundary between India and Pakistan?

- a) Lord Mountbaten                              b) Sir Radcliff  
c) Sir Cripps                              d) Laurence

66. When did the British Government annual the partition of Bengal?

- a) 1919                              b) 1917                              c) 1914                              d) 1911

67. Who was the chairman of the Drafting Committee of the framers of the Indian constitution?

- a) J.B. Kriplani                              b) Rajendra Prasad  
c) J.L. Nehru                              d) B.R. Ambedkar





79. Choose the number set similar to the number set (5, 6, 22)  
a) (4, 8, 2)                      b) (3, 8, 26)                      c) (8, 9, 34)                      d) (7, 9, 48)
80. Choose the odd one out:  
a) Goat                              b) Dog                              c) Hare                              d) Cow
81. Choose the odd one out:  
a) Chair                              b) Table                              c) Bench                              d) Stool
82. Which of the following words can't be formed by the letters of the word CARPENTER?  
a) Car                                  b) Painter                              c) Carpet                              d) Repent
83. Find the missing term.  
17, 2, 34, 3, 102, 4, ...?  
a) 204                                  b) 408                                  c) 256                                  d) 456
84. The longest dam in India is-  
a) Bhakra Nangal dam                              b) Nagarjun Sagar dam  
c) Hirakud dam                                      d) Kosi dam
85. The jog water falls is situated in-  
a) Uttar Pradesh                                      b) West Bengal  
c) Karnataka    d) Maharashtra
86. The brightest planet is-  
a) Jupiter                                  b) Mars                                  c) Venus                                  d) Mercury
87. The currency of Italy is-  
a) Dollar                                  b) Waht                                  c) Pound                                  d) Lira
88. The rings are found around-  
a) Uranus                                  b) Jupiter                                  c) Mars                                  d) Saturn
89. The filament of an electric bulb is made of-  
a) Copper                                  b) Iron                                  c) Aluminium                                  d) Tungestan
90. 'Clove' is obtained from-  
a) Root                                      b) Stem                                      c) Bud                                      d) Fruit
91. Chandra Gupta Maurya embraced Jainism in the 3<sup>rd</sup> century B.C. at-  
a) Magadh                                  b) Jaisalmer                                  c) Shravanabelagola                                  d) Pataliputra

92. Cauvery river flows through-
- a) Tamil Nadu and Kerala                      b) Andhra Pradesh and Karnataka  
c) Karnataka and Tamil Nadu                d) Karnataka and Kerala
93. Dr. C.V. Raman was awarded Nobel Prize in-
- a) Medicine                      b) Physics                      c) Literature                      d) Chemistry
94. Gokak Falls is situated in which district?
- a) Dharwad                      b) Raichur                      c) Belagaum                      d) Bidar
95. Famous sanctuary Ranganthittu is near-
- a) Bharatpur                      b) Sikandarabad                      c) Mysore                      d) Chennai
96. Belur is situated on the bank of which river?
- a) Cauvery                      b) Yegachi                      c) Yamuna                      d) None of these
97. Hampi has the ruins of which empire?
- a) Cholas                      b) Pandyas                      c) Vijaynagar                      d) Cheras
98. Vrindavan Express is run between-
- a) Chennai and Tiruchi                      b) Chennai and Bangalore  
c) Chennai and Mysore                      d) Bangalore and Mysore
99. Nandi Hills are situated in the vicinity of-
- a) Bangalore                      b) Mysore                      c) Hubli                      d) Chennai
100. The Multi-Purpose river valley project of Karnataka is-
- a) Damodar                      b) Bhakra                      c) Tungabhadra                      d) Kosi

## Answers

- 1-b; 2-a; 3-b; 4-c; 5-c; 6-a; 7-b; 8-a; 9-a; 10-b; 11-b; 12-a; 13-c; 14-a; 15-b;  
16-d; 17-a; 18-c; 19-d; 20-a; 21-d; 22-d; 23-d; 24-c; 25-d; 26-a;  
27-b; 28-a; 29-c; 30-d; 31-b; 32-b; 33-c; 34-d; 35-d; 36-d; 37-a; 38-b; 39-b;  
40-c; 41-c; 42-b; 43-a; 44-c; 45-a; 46-c; 47-a; 48-a; 49-c; 50-b;  
51-a; 52-d; 53-a; 54-c; 55-d; 56-c; 57-d; 58-c; 59-b; 60-c; 61-c; 62-a;  
63-b; 64-c; 65-b; 66-d; 67-d; 68-a; 69-a; 70-c; 71-a; 72-d; 73-c; 74-a;  
75-c; 76-c; 77-b; 78-c; 79-c; 80-c; 81-b; 82-b; 83-b; 84-c; 85-c; 86-c;  
87-d; 88-d; 89-d; 90-c; 91-c; 92-c; 93-b; 94-c; 95-c; 96-b; 97-c; 98-b;  
99-a; 100-c